



Bal Bharati
PUBLIC SCHOOL
NTPC, DARLIPALI

(An Institution of the Child Education Society(Regd.), New Delhi)

Holiday Homework

Class -VII

Name:

Roll No.:






ENGLISH HOLIDAY HOMEWORK

- A. Imagine you are a small wildflower growing in a vast forest. Write a letter to a mighty oak tree, expressing your thoughts on the importance of being the best in whatever role life assigns to you. Emphasize that true success lies in giving your best effort, regardless of size or position. **In your letter, quote an appropriate line from the poem 'Be the Best of Whatever You Are' to strengthen your message. (Do it in an A4 sheet)**

B. Fill the blanks with the correct form of pronouns.

- 1) We scored as many goals as ____ (they/them).
- 2) I am one year older than ____ (he/him).
- 3) He is as good a student as ____ (she/her).
- 4) Let ____ (he/him) who can, save her from drowning.
- 5) The boy ____ (who/whom) fell off his bicycle has hurt his leg.
- 6) I have not seen the girl ____ (whose/whom) suitcase was stolen.
- 7) Seema is the maid ____ (who/whom) I have employed.
- 8) The jury has given ____ (its/their) verdict.
- 9) The Cabinet gave ____ (their/its) vote.
- 10) The Secretary and Treasurer did not do ____ (their/his) job.

A. Change the nouns from masculine to feminine gender and rewrite the sentence by making necessary changes:

- 1) The landlord asked me to move out.
 - 2) Priests perform rituals for the longevity of their king.
 - 3) My father is a doctor.
 - 4) All my nephews were invited to the party.
 - 5) The king was pleased to meet the monk.
 - 6) His son wanted to ride on the horse.
 - 7) This is a school for wizards.
 - 8) Manek requested me to attend his brother's wedding.
 - 9) The heir will soon take over the duties of his father.
 - 10) The host welcomed us with a warm smile.
- 

MATHEMATICS HOLIDAY HOMEWORK

1. State and verify following integers properties.

Write two examples of each.

- a) Commutative property (both Addition and multiplication)
- b) Associative property (both Addition and multiplication)
- c) Distributive property (Multiplication)

2. Complete the multiplication table:

X	-7	-4	-2	0	3	8
-5						
-4						
3						
6						
7						
11						


Q3. Verify the following:

- $21 \times -4 + -6 = 21 \times -4 + 21 \times (-6)$
- $15 \times 6 + -3 = 15 \times 6 + 15 \times (-3)$
- $-12 \times 8 + -6 = -12 \times 8 + (-12) \times (-6)$

Q5. Draw in A4 sheet and fill in the box with integers.

Hands-on Activities

Fill in the box:



Q6. Rita goes 20 km towards east from a point A to the point B. From B, she moves 30 km towards west along the same road. If the distance towards east is represented by a positive integer, then, how will you represent the distance travelled towards west? By which integer will you represent her final position from A?

Q7. Use $>$, $<$ OR $=$ symbols in the blank space in each of the following:

a. $(-3) - (-5)$ $(-4) + (-9)$ b. $71 - 2 - 31$ $71 - 2 + 31$

c. $39 + (-35) - (58)$ $37 + (-11) - (+26)$ d. $23 + (-8) - 7$ $9 - 13 + 12$

Q8. Value based (Life skills) questions.


Seeing the poor and under privileged children in the neighborhood, the residents of Bharat Nagar decided to distribute 1 shawl and 1 blanket during winter to every needy person. The cost of a shawl is 350 and the cost of a blanket is 650.

(i) Find the total number of shawls and blankets distributed if there are 82 houses contributing 500 each.

(ii) What lesson (value) do you learn from it?

Q9. Write a negative integer and a positive integer whose sum is -5 .

Q10. Write a negative integer and a positive integer whose difference is -3





S.S.T HOLIDAY HOMEWORK

1. Write exercise questions of chapter-environment.

2.  **1. Create a “Time Travel” Scrapbook**

Objective: To understand the political and social life during the medieval period.

Instructions:

Imagine you are a time traveller visiting Medieval India.

Create a scrapbook (handmade or digital) with *at least 6 pages*.

Each page should reflect a different aspect of medieval life:

A visit to a medieval market.

Meeting a ruler (like Akbar, Razia Sultan, or a Rajput king).

Life in a village or town.

SCIENCE HOLIDAY HOMEWORK

NAME OF TOPIC	INSTRUCTIONS
1. Mini hydroponics model.	Explore more on hydroponics and make working model of it.
2. Exercise of Chapter-2	Write the questions and answers of Exercise-Chapter-2



COMPUTER HOLIDAY HOMEWORK

"Mission Code Crack – Explore the Secret World of Numbers!"

1. Secret Code Bookmark

- Create a colourful bookmark.
- Write a secret message in Binary, Decimal, and Hexadecimal.
- Leave a key on the back for decoding.
- Tip: Try writing “HAPPY HOLIDAYS” using codes!

2. Spy Name in Binary

- Write your full name.
- Convert each letter into its ASCII Binary Code (we'll provide you a chart).
- Example: A = 65 → Binary = 01000001
- Decorate it like a “Spy ID Card” with your photo!

1. Build a "Number Converter Wheel" – a paper wheel that rotates to show how numbers change from decimal to binary/octal/hex

HINDI HOLIDAY HOMEWORK

1-शब्दकोश निर्माण

कार्य: 'हम पंछी उन्मुक्त गगन के' और 'हिमालय की बेटियां' पाठों से 10 ऐसे शब्द चुनें जिनके पर्यायवाची शब्द हों। प्रत्येक शब्द के लिए कम से कम 3 पर्यायवाची शब्द लिखें। अब इन शब्दों को उपयोग करके एक छोटा शब्दकोश बनाएं। शब्दकोश को आकर्षक बनाने के लिए प्रत्येक शब्द के साथ एक छोटा चित्र या रंगों का उपयोग करें।

उद्देश्य: शब्दावली और रचनात्मकता को बढ़ाना।

2-पत्र लेखन: 'मेरे प्रिय लेखक/कवि को पत्र'

कार्य: अपने पसंदीदा हिंदी लेखक (जैसे प्रेमचंद, या अन्य कोई भी लेखक या कवि) को एक औपचारिक पत्र लिखें। पत्र में बताएँ कि उनकी कौन-सी रचना अपने पढ़ी और आपको पसंद आई और क्यों। (150-200 शब्द)

उद्देश्य: औपचारिक लेखन, साहित्य के प्रति रुचि और विश्लेषणात्मक सोच को बढ़ाना ।

4-प्रकृति की डायरी -

एक सप्ताह तक रोज़ अपने आसपास की प्रकृति (जैसे, पेड़, पक्षी, या मौसम) को देखो और हर दिन 2-3 वाक्य लिखो कि तुमने क्या देखा या महसूस किया।

5-पत्र लेखन:

अपने किसी काल्पनिक दोस्त (जैसे, एक पक्षी, बादल, या सूरज) को एक पत्र लिखो, जिसमें तुम अपनी गर्मियों की छुट्टियों की सबसे मजेदार घटना का वर्णन करो। पत्र में यह भी पूछो कि वह गर्मियों में क्या करता है।

SANSKRIT HOLIDAY HOMEWORK

1. निम्नलिखित शब्दरूपों याद करके लिखें ।

मुनि , लता , नदी , अस्मद् , किम् (तीन लिंग)

2. निम्नलिखित धातुरूपों याद करके लिखें ।

लट् लकार , लृटलकार , लङ् लकार (गम् , अस् , लिख् , पठ् , कृ)

3. संख्या याद करके लिखें । 1 – 30

4. रिक्तस्थानों को पूर्ति कीजिए-

एकवचनम्

द्विवचनम्

बहुवचनम्

सः

सा

रामः

लता

फलम्

त्वम्

5. निम्नलिखित शब्दों को परिवर्तन कीजिए -

धातुः	लकारः	पुरुषः	एकवचनम्	द्विवचनम्	बहुवचनम्
गम्	लट्	प्रथम्			
गम्	लङ्	प्रथम्			
पठ्	लट्	मध्यम्			
अस्	लट्	उत्तम्			
लिख्	लङ्	मध्यम्			
वद्	लट्	उत्तम्			
चल्	लट्	मध्यम्			
पत्	लङ्	उत्तम्			
पठ्	लङ्	प्रथम्			

6. निम्नलिखित वाक्यों को अनुवाद करें ।

क. सब खाना खाता है । च. तुम दो खाना खाते थे ।

ख. वे दो खाना खाते हैं । छ. तुम सब खाना खाते थे ।

ग. वे सब खाना खाते हैं । ज. मैं खाना खाता हूँ ।

घ. अनीता नाचती थी । झ. हम दो खाना खाते हैं ।

ड. तुम खाना खाता थे । ञ. हम सब खाना खाते हैं ।

7. छात्र चार्ट पेपर पर लट् और लट्‌लकार के पठ्, अस्, कृ धातुओं के रूप लिखकर कक्षा में टाँगे ।

8. poster making- पर्यावरणम्

ODIA HOLIDAY HOMEWORK

ପାଠ - ୧ (କଳା ମାଣିକରେ)

ପଦ୍ୟ କୁ ପଠନ କରି ଶ୍ରୀକୃଷ୍ଣଙ୍କ ବାଲ୍ୟଲିଳା ବିଷୟରେ ଲେଖିବ । (୧୨୦ ଶବ୍ଦରେ)

★ପାଠ - ୯ (ରାମାୟଣ କଥା) ବିଷୟକୁ ପଢ଼ିବ ଓ ଆଦର୍ଶ ପୁରୁଷ ଶ୍ରୀ ରାମଚନ୍ଦ୍ରଙ୍କ କେଉଁ ମହାନତା ଗୁଣର ପରିଚୟ ପାଇଛ ସେ ବିଷୟରେ (୧୦୦ଶବ୍ଦରେ) ଲେଖିବ ।



MUSIC

HOLIDAY HOMEWORK



Multiple Choice Questions.

1. Which of the following is a wind instrument?
 - a) Sitar
 - b) Tabla
 - c) Flute
 - d) Harmonium

 1. The Tabla is mainly used for?
 - a) Melody
 - b) Rhythm
 - c) Drone l
 - d) Harmony

 1. In Hindustani Music, how many swaras are there in total (including shuddh, komal and tivra)?
 - a) 7
 - b) 10
 - c) 12
 - d) 15

 1. Which of the following is a Taal with 8 beats?
 - a) Dadra
 - b) Keherwa
 - c) Jhaptaal
 - d) Teentaal

 1. Who is famous for pyaing the shehnai?
 - a) Ustaaad Bismillah Khan
 - b) Ustaaad Zakir Hussain
 - c) Pandit Ravi Shankar
 - d) Pandit Birju Maharaj
- 
- 




DANCE HOLIDAY HOMEWORK

1. What are not the basic elements of dance?

- a. Rhythm
 - b. Movement
 - c. Modulation
- Ans-----

2. Classical Dance is primarily which based art?

- a. Solo
 - b. Group
 - c. None
- Ans-----





3. How many Single hand Mudra there are in Bharatnatyam dance?

- a. 28
 - b. 25
 - c. 23
- Ans-----

4. Which session Bihu festival is came?

- a. Spring
 - b. Rainy
 - c. Summer
- Answer----

5. What is the most graceful posture of Odissi dance?

- a. Mangalcharan
 - b. Chauka
 - c. Tribhanga
- Ans-----
- 
- 



LIBRARY HOLIDAY HOMEWORK

Read the book “ The Naval Journey of India”(Book 1) -

https://drive.google.com/file/d/1Z7WA1erxOvoOokEMkJzXwGAILYsOyjVP/view?usp=drive_link

Answer to the questions from pages: 30- 32 in a A4 sheet

P.E/YOGA HOLIDAY HOMEWORK

Physical Education and Sports Science MCQ

1. Who was the first President of the International Olympic Committee?

- [A] Pierre de Coubertin
- [B] Demetrios Vikelas
- [C] Woodrow Wilson
- [D] Winston Churchill

2. Which are the colours of the rings present in the symbol of the Olympic Games?


- [A] Blue, Yellow, Black, Green, Red
- [B] Blue, Orange, Violet, Green, Red
- [C] Blue, Olive, Purple, Green, Red
- [D] Blue, Black, White, Green, Red

3. In which year, the first Youth Olympic Games was held?

- [A] 2002
- [B] 2006
- [C] 2010
- [D] 2014

4. Which is the national sport of Bangladesh?

- [A] Hockey
- [B] Football
- [C] Kabaddi
- [D] Cricket



5. Which country's national football team is nicknamed as "Gli Azzurri (The Blues)"?

- [A] Italy
- [B] Spain
- [C] Portugal
- [D] Croatia

6. In which year, the first international football tournament took place?

- [A] 1883
- [B] 1884
- [C] 1885
- [D] 1886

7. 2010 Commonwealth Games was held in _____.

- a) New Delhi
- b) London
- c) Dublin
- d) Johannesburg



8. India won the 1st Cricket World Cup in the year

- a) 1975
- b) 1983
- c) 1979
- d) 1987

9. _____ won the 1st IPL season in 2008.

- a) Rajasthan Royals
- b) Deccan Chargers
- c) Chennai Super Kings
- d) Mumbai Indians

10. India won the 1st Cricket World Cup in the year

- a) 1975
 - b) 1983
 - c) 1979
 - d) 1987
- 
- 

ART & CART
HOLIDAY HOMEWORK




Bal Bharati
PUBLIC SCHOOL
DARLIPALI

Holiday homework

Class-VII

Art



**Print it and paste piece of color paper to
complete the image**